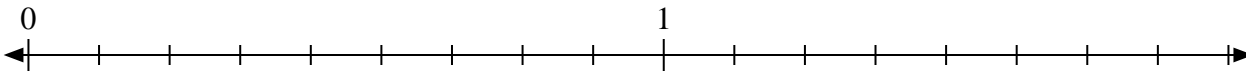


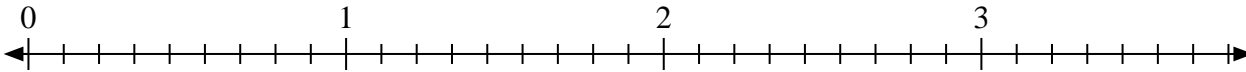


Solve each problem.

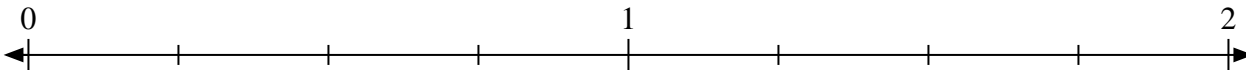
- 1) Mark the location of
- $\frac{16}{9}$



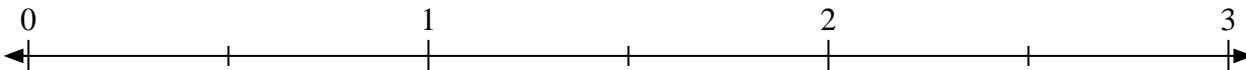
- 2) Mark the location of
- $\frac{18}{9}$



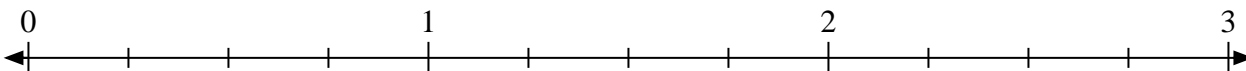
- 3) Mark the location of
- $\frac{7}{4}$



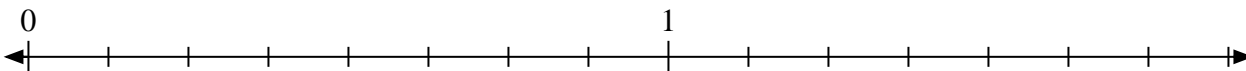
- 4) Mark the location of
- $\frac{4}{2}$




- 5) Mark the location of
- $\frac{8}{4}$



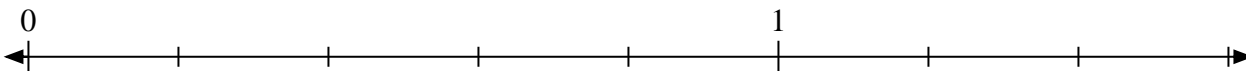
- 6) Mark the location of
- $\frac{11}{8}$



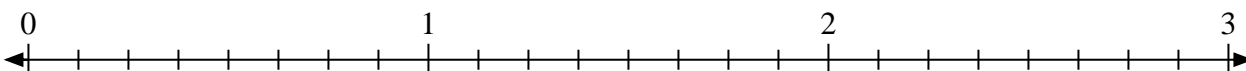
- 7) Mark the location of
- $\frac{8}{5}$



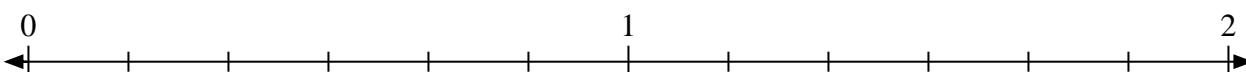
- 8) Mark the location of
- $\frac{6}{5}$



- 9) Mark the location of
- $\frac{14}{8}$



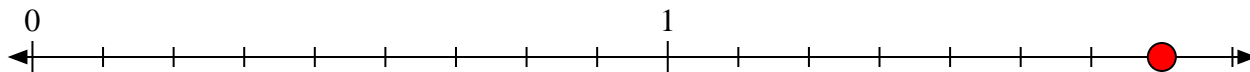
- 10) Mark the location of
- $\frac{10}{6}$



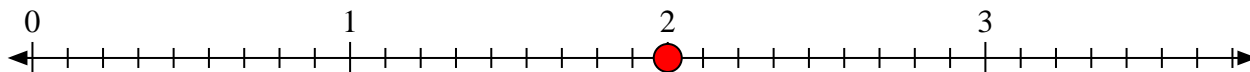


Solve each problem.

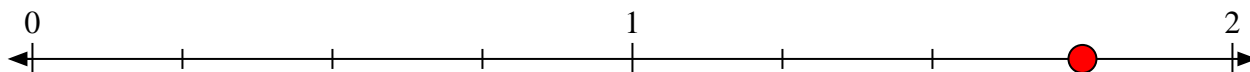
- 1) Mark the location of
- $\frac{16}{9}$



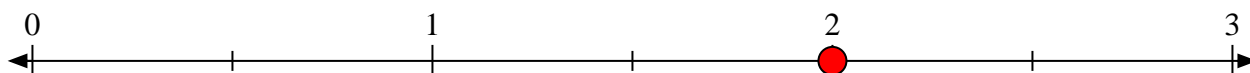
- 2) Mark the location of
- $\frac{18}{9}$



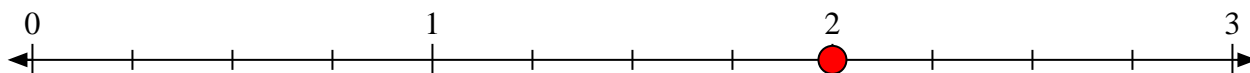
- 3) Mark the location of
- $\frac{7}{4}$



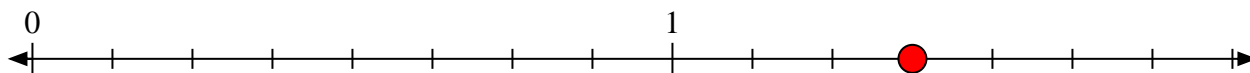
- 4) Mark the location of
- $\frac{4}{2}$




- 5) Mark the location of
- $\frac{8}{4}$



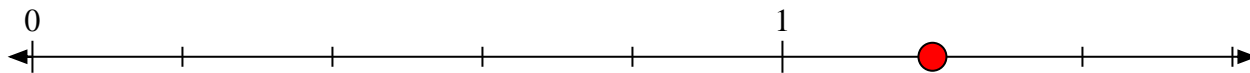
- 6) Mark the location of
- $\frac{11}{8}$



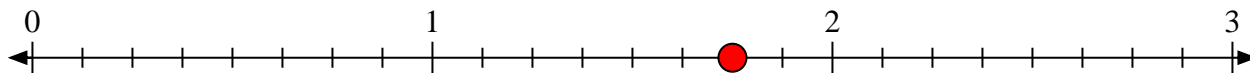
- 7) Mark the location of
- $\frac{8}{5}$



- 8) Mark the location of
- $\frac{6}{5}$



- 9) Mark the location of
- $\frac{14}{8}$



- 10) Mark the location of
- $\frac{10}{6}$

